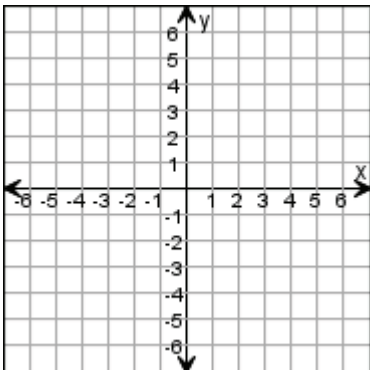
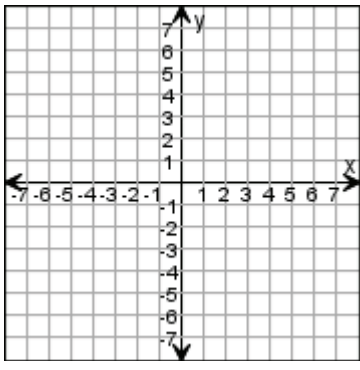
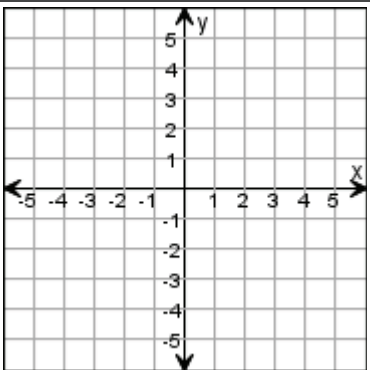
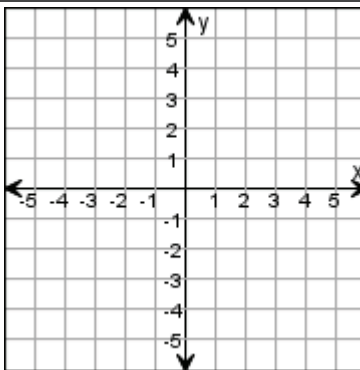
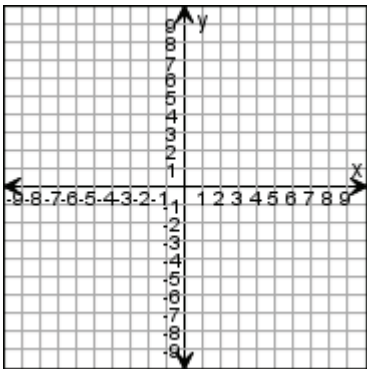
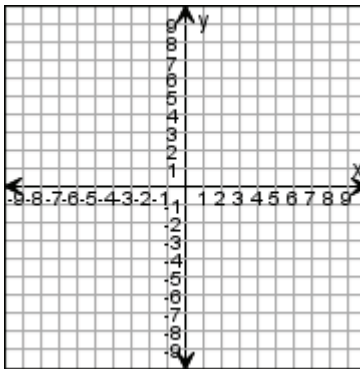


Name _____

Date _____
(Answer ID # 0869533)

The Coordinate Plane

Draw the ordered points on the grid. Label each point.

1. 	<p>F (5, -2) H (2, 5) Z (-3, 5) E (-6, -1) L (2, 6) C (0, -5)</p>
2. 	<p>C (-5, 6) X (7, 3) M (-3, 1) E (6, 0) A (5, 0) R (0, -5)</p>
3. 	<p>G (-4, -3) V (-1, -3) R (1, 2) Q (-1, -2) K (1, -3) D (0, 5)</p>
4. 	<p>X (1, 2) E (-3, -1) B (0, -2) A (3, -1) T (-1, 4) V (-3, 5)</p>
5. 	<p>A (6, -3) J (3, 8) L (-6, 8) X (8, 0) G (8, 1) C (-1, 7)</p>
6. 	<p>Q (-9, -8) D (0, 5) V (-2, -3) M (1, -3) S (-9, 1) C (6, -7)</p>